



**CONCURSO PÚBLICO**

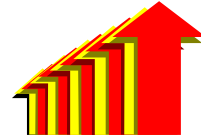

**PREFEITURA MUNICIPAL**

**SETEMBRO / 2010**


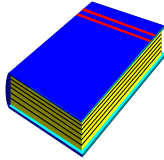
**AGENTE DE SERVIÇOS ESCOLAR**  
**AUXILIAR DE OBRAS E SERVIÇOS**  
**AUXILIAR DE OFICIAL DE SERVIÇOS**  
**AUXILIAR DE SERVIÇOS GERAIS**  
**COZINHEIRO HOSPITALAR**  
**OFICIAL DE SERVIÇOS**  
**OPERADOR DE LAVANDERIA HOSPITALAR**  
**OPERADOR DE MÁQUINAS LEVES**  
**OPERADOR DE MÁQUINAS PESADAS - PÁ-CARREGADEIRA**  
**OPERADOR DE MÁQUINAS PESADAS - PATROL**  
**OPERÁRIO**  
**VIGILANTE**



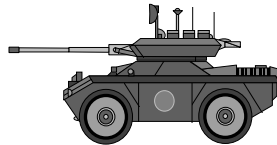
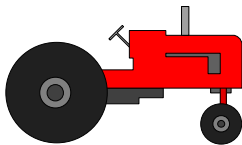
01. QUAL DAS SETAS ESTÁ APONTANDO PARA A DIREITA?



02. EM QUAL DAS OPÇÕES NÃO EXISTE RELAÇÃO DIRETA ENTRE AS FIGURAS?




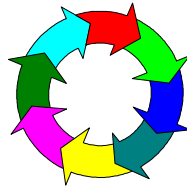

03. QUE VEÍCULO É UTILIZADO NA AGRICULTURA?



04. QUAL DOS CONJUNTOS CONTÉM 11 ESTRELAS?



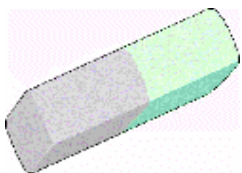
05. QUAL DAS FIGURAS APRESENTA O MENOR NÚMERO DE SETAS?






06. QUAL DESSES ANIMAIS É O MAIS LENTO?




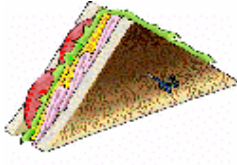
07. MARQUE A FIGURA QUE POSSUI FORMA CIRCULAR:





08. "TRIO É UM GRUPO DE \_\_\_\_\_ PESSOAS":




09. QUAL DOS ALIMENTOS É, EM GERAL, SERVIDO EM TEMPERATURA QUENTE?




10. MARQUE A FIGURA QUE POSSUI FORMA TRIANGULAR:



11. QUAL DAS SETAS ESTÁ APONTANDO PARA BAIXO?



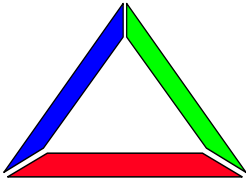
12. MARQUE O ANIMAL MAIS BAIXO:




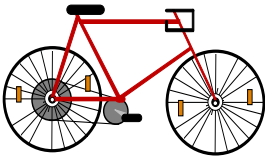
13. QUAL DOS OBJETOS NÃO ESTÁ VAZIO?



14. MARQUE A FIGURA QUE POSSUI FORMA RETANGULAR:



15. QUAL DESSES VEÍCULOS POSSUI APENAS DUAS RODAS?



16. QUAL É A LINHA PONTILHADA MAIS LONGA?






17. PARA FIXAR UM PREGO EU PRECISO DE...



18. QUAL DESSES ANIMAIS É O MAIS PESADO?



19. INDIQUE A ALTERNATIVA EM QUE TODAS AS SETAS APONTAM PARA O CENTRO:



20. QUAL DOS FICHÁRIOS ESCOLARES ESTÁ FECHADO?

